

VIDYA BHAWAN BALIKA VIDYA PITH

CLASS- 1

DATE – 07. 04. 21

SUB -MATHS

S. T - PRAGYA

BASED ON N.C.E.R.T PATTERN :

CH- 1 (REVISION)

Today we read about Longest – Shortest ,

Thickest – Thinnest and Nearer – Farther .

First of all , observe the following examples


And write the correct answer.

KA

Observe the following :

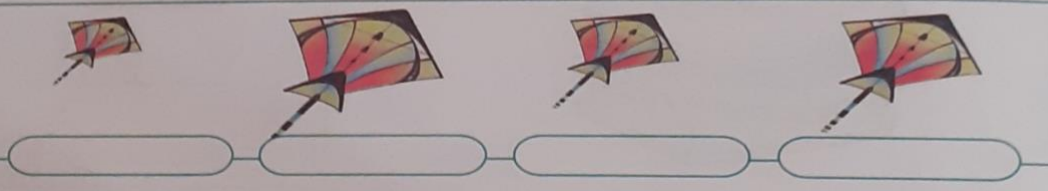
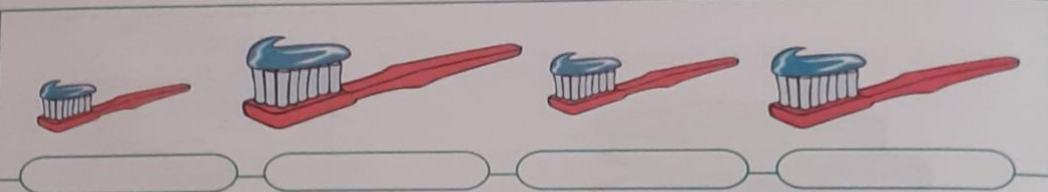
Longest-Shortest

Example



Shortest _____ Longest

Write Longest or Shortest



Observe the following :

Thickest-Thinnest

Example



Thinnest



Thickest

Write 'Thickest' or 'Thinnest'



Nearer-Farther

Colour (orange) the carrot farther from the rabbit.



Ring the bird farther from the tree.



Tick the fruit nearer to the basket.



Make a box around the cat nearer to the rat.



Tick the boy nearer to the school.